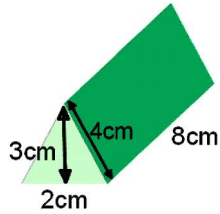
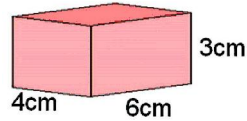


108cm^2

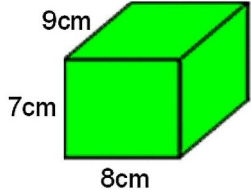


What is the surface area of this Triangular Prism?



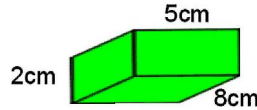
What is the surface area of this cuboid?

166cm^2

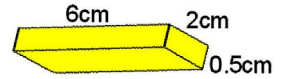


What is the surface area of this cuboid?

49cm^2




What is the surface area of this cuboid?



What is the surface area of this cuboid?

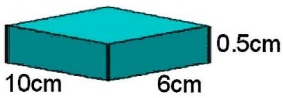
32cm^2

Finish



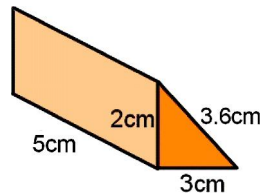
What is the surface area of this cube?

382cm^2



What is the surface area of this cuboid?

108cm^2

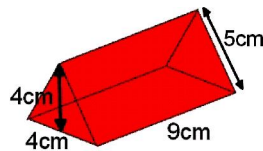


What is the surface area of this Triangular Prism?

136cm^2

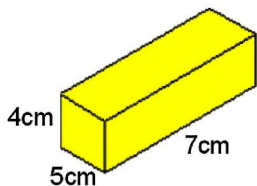
86cm^2

54cm^2



What is the surface area of this Triangular Prism?

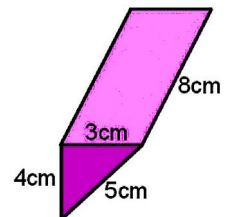
132cm^2



What is the surface area of this cuboid?

142cm^2

Start



What is the surface area of this Triangular Prism?